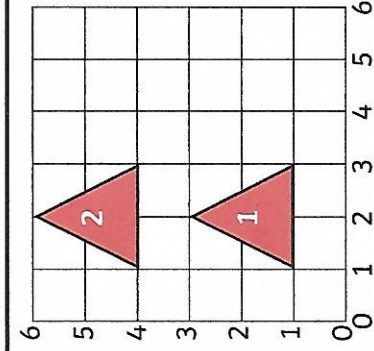
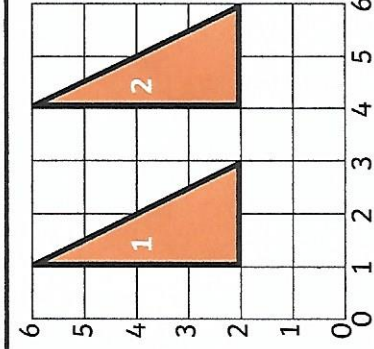


# Drawing Translated Shapes Answers

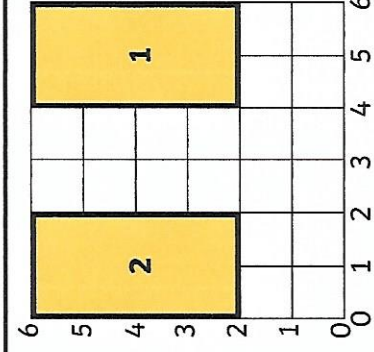
Draw the 2D shapes in their new positions after a translation along one axis.



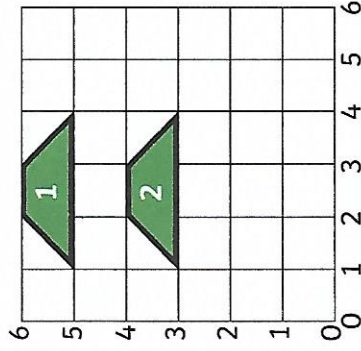
This equilateral triangle is translated **up 3**.  
Draw the triangle in its new position.



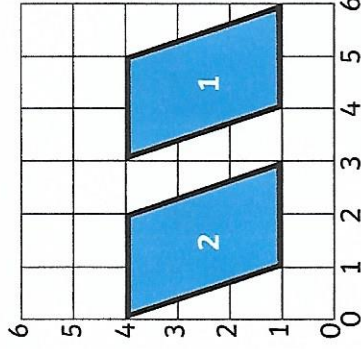
This right-angled triangle is translated **right 3**.  
Draw the triangle in its new position.



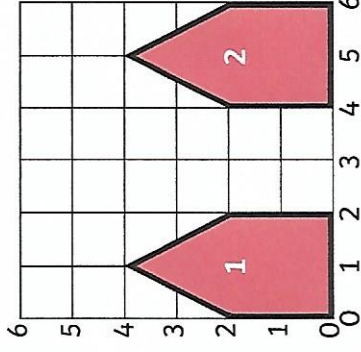
This rectangle is translated **left 4**.  
Draw the rectangle in its new position.



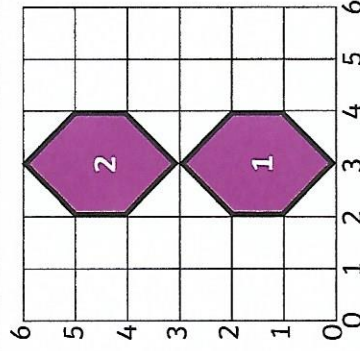
This trapezium is translated **down 2**.  
Draw the trapezium in its new position.



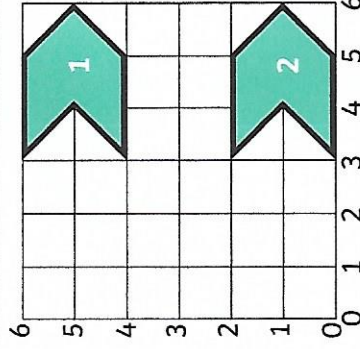
This parallelogram is translated **left 3**.  
Draw the parallelogram in its new position.



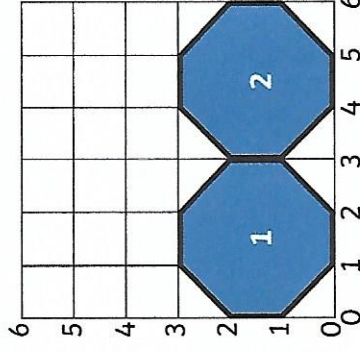
This pentagon is translated **right 3**.  
Draw the pentagon in its new position.



This hexagon is translated **up 3**.  
Draw the hexagon in its new position.



This hexagon is translated **down 4**.  
Draw the hexagon in its new position.



This octagon is translated **right 3**.  
Draw the octagon in its new position.