

Varied Fluency

Step 8: Add and Subtract 10s

National Curriculum Objectives:

Mathematics Year 2: (2C2a) [Add and subtract numbers mentally, including: a two-digit number and tens](#)

Mathematics Year 2: (2C2b) [Add and subtract numbers using concrete objects and pictorial representations, including: a two-digit number and tens](#)

Differentiation:

Developing Adding and subtracting two multiples of 10 (numbers no greater than 50).

Expected Adding and subtracting any 2-digit number and a multiple of 10 (numbers no greater than 50).

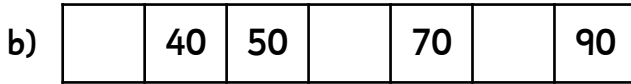
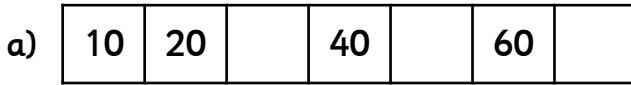
Greater Depth Adding and subtracting any 2-digit number and a multiple of 10 (numbers no greater than 100).

[More resources](#) which follow the same small steps as White Rose.

Did you like this resource? Don't forget to [review](#) it on our website.

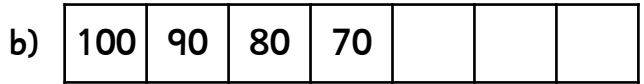
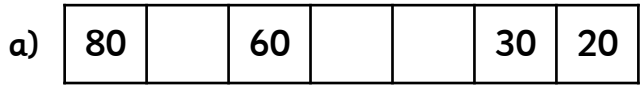
Varied Fluency – Add and Subtract 10s

1a. Fill in the gaps on the number lines below.



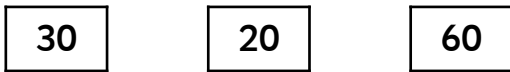

2 VF

1b. Fill in the gaps on the number lines below.



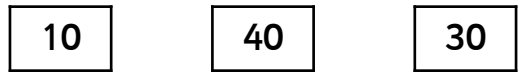
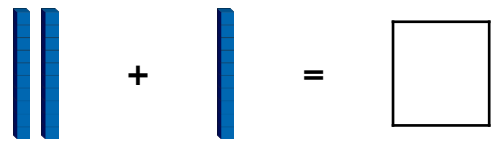
2 VF

2a. Choose the correct answer from the options below to complete the Base 10 calculation.





2 VF

2b. Choose the correct answer from the options below to complete the Base 10 calculation.



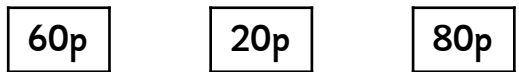
2 VF

3a. How much money is there altogether? Circle the correct answer.



2 VF

3b. How much money is there altogether? Circle the correct answer.



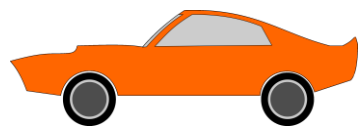
2 VF

4a. Holly had 50 flowers. She gives 30 away. How many does Holly have now?



2 VF



4b. Mohammed had 20 toy cars. He bought 30 more. How many toy cars does Mohammed have now?



2 VF

Varied Fluency – Add and Subtract 10s

5a. Fill in the gaps on the number lines below.



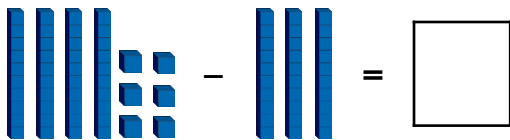
2 VF

5b. Fill in the gaps on the number lines below.



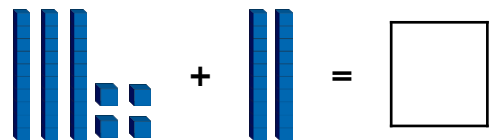
2 VF

6a. Choose the correct answer from the options below to complete the Base 10 calculation.



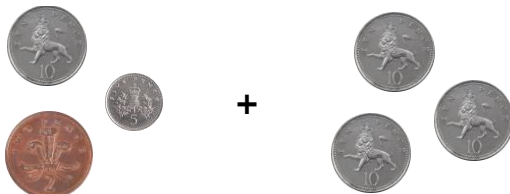
2 VF

6b. Choose the correct answer from the options below to complete the Base 10 calculation.



2 VF

7a. How much money is there altogether? Circle the correct answer.



2 VF

7b. How much money is there altogether? Circle the correct answer.



2 VF

8a. Sameira had 43 marbles. She gives 10 away. How many does Sameira have now?



2 VF

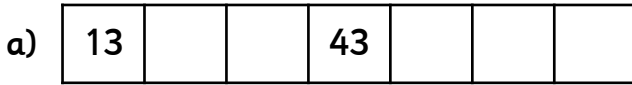
8b. William had 17 fish. He bought 20 more. How many does William have now?



2 VF

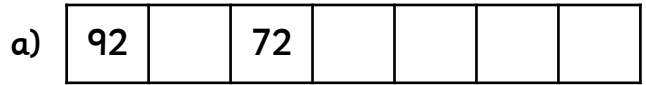
Varied Fluency – Add and Subtract 10s

9a. Fill in the gaps on the number lines below.



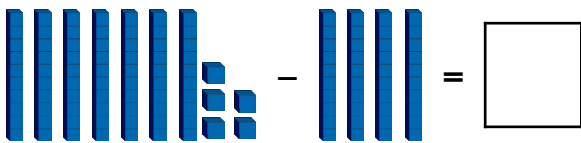
2 VF

9b. Fill in the gaps on the number lines below.



2 VF

10a. Choose the correct answer from the options below to complete the Base 10 calculation.



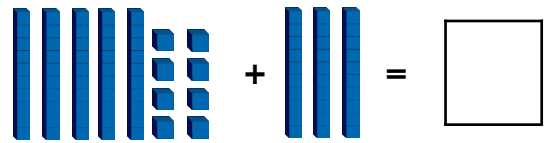
35

55

45

2 VF

10b. Choose the correct answer from the options below to complete the Base 10 calculation.



28

78

88

2 VF

11a. How much money is there altogether? Circle the correct answer.



82p

12p

92p

2 VF

11b. How much money is there altogether? Circle the correct answer.



47p

77p

37p

2 VF

12a. Kai had 89 jewels. He gives 30 away. How many does Kai have now?



59

69

49

2 VF

12b. Emma had 48 buttons. She bought 40 more. How many does Emma have now?



48

88

37

2 VF

Varied Fluency – Add and Subtract 10s

Developing

1a. a) 30, 50, 70 b) 30, 60, 80

1b. a) 70, 50, 40 b) 60, 50, 40

2a. 20

2b. 30

3a. 70p

3b. 20p

4a. 20

4b. 50

Expected

5a. a) 33, 63, 73 b) 36, 56, 76

5b. a) 75, 65, 45 b) 62, 52, 42

6a. 16

6b. 54

7a. 47p

7b. 19p

8a. 33

8b. 37

Greater Depth

9a. a) 23, 33, 53, 63, 73 b) 26, 36, 56, 66, 76

9b. a) 82, 62, 52, 42, 32 b) 71, 51, 41, 21, 11

10a. 35

10b. 88

11a. 92p

11b. 47p

12a. 59

12b. 88