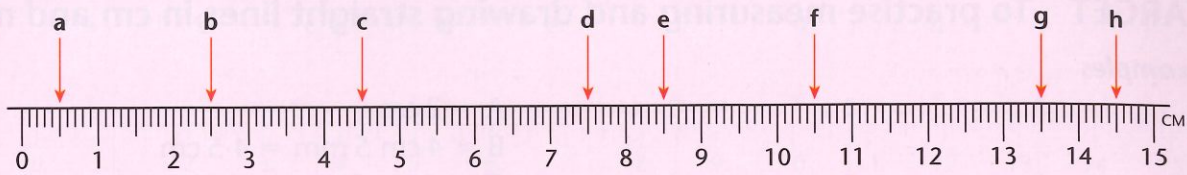
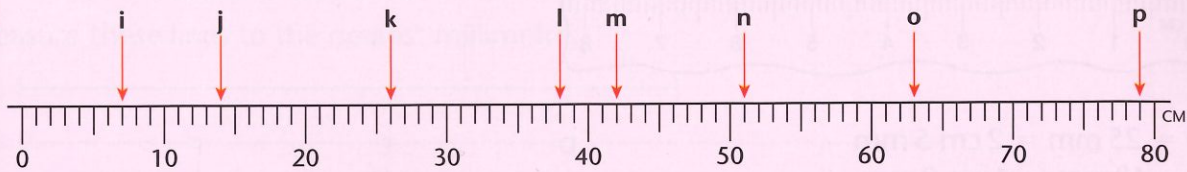


B

Read the measurements shown on each ruler.

1**2**

Measure these lines to the nearest half centimetre.

3**4****5****6****7**

Draw lines of 5.5 cm, 10.5 cm, 3.5 cm and 11.5 cm.

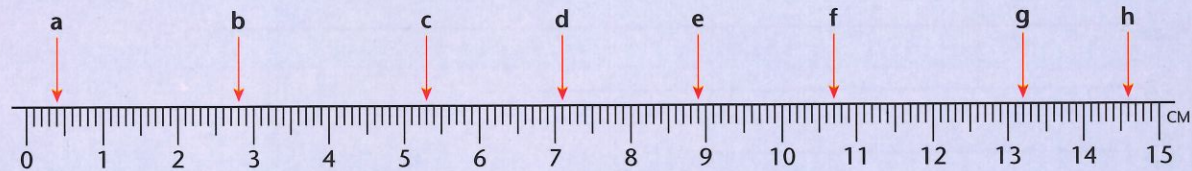
8

a) Write down five things which you think have a length of about 10 cm.



b) Measure each length to the nearest half centimetre.

C**1**

Read the measurements shown to the nearest millimetre.



Measure these lines to the nearest millimetre.

2**3****4****5****6**

Draw lines of 6.4 cm, 10.6 cm, 8.1 cm and 13.9 cm.

7

Write down five things which you think have a length of about 20 cm.
Measure each length to the nearest millimetre.

8

Write down five things which you think have a length of about one metre.
Measure each length to the nearest 0.5 cm.