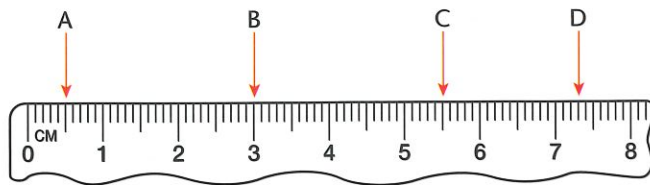
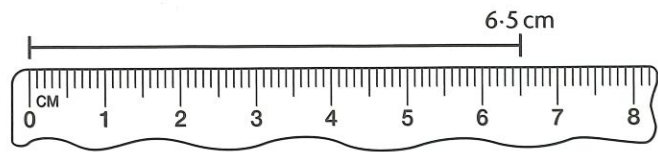


**TARGET** To measure and draw straight lines in cm and mm.

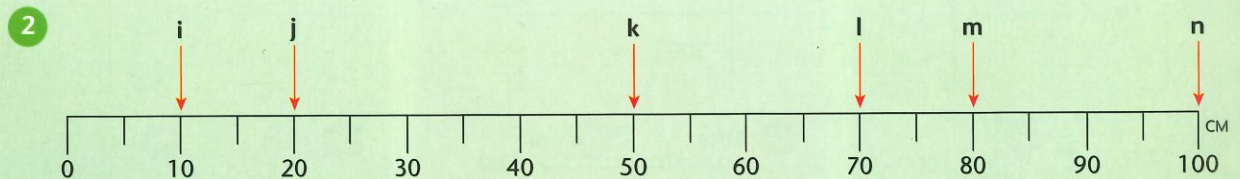
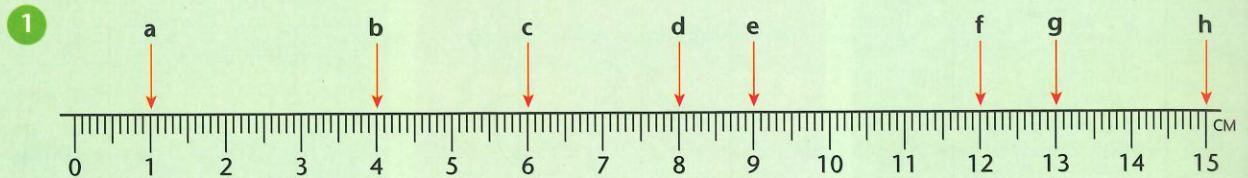
Start measuring from 0, not from the end of the ruler, and read the scale.



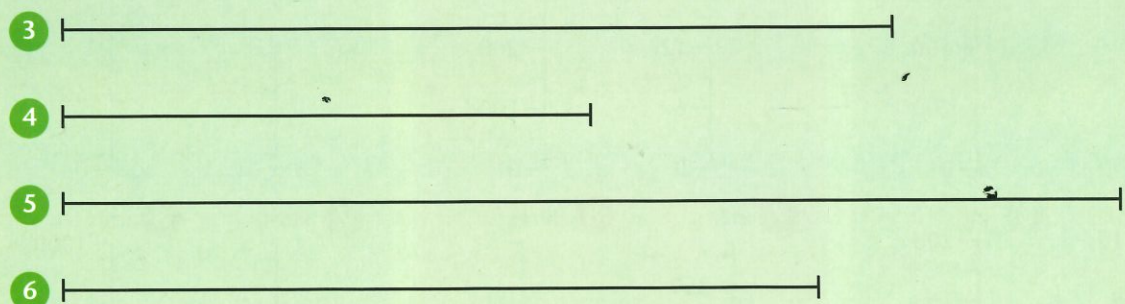
- A = 5 mm = 0.5 cm
- B = 3 cm
- C = 5 cm 5 mm = 5.5 cm
- D = 7 cm 3 mm = 7.3 cm

## A

Read the measurements shown on each ruler.



Measure these lines to the nearest centimetre.



7 Draw lines of 12 cm, 5 cm, 13 cm and 8 cm.

- 8 a) Write down five things in the classroom which you think have a length of about 15 cm.  
 b) Measure the length of each object to the nearest centimetre.